




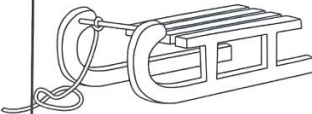









Name: _____											
Long Division with 2 Digit Divisors Find the Answer											
Solve each problem. Color or circle the correct answer below it.											
© Chloe Campbell											
$824 \div 84$ 			$321 \div 36$ 			$218 \div 48$ 			$701 \div 51$ 		
9 R68 12 R2 8 R12			9 R15 4 R31 8 R33			5 R41 3 R12 4 R26			14 R19 8 R38 16 R25		
$959 \div 97$ 			$372 \div 27$ 			$540 \div 25$ 			$416 \div 38$ 		
8 R18 1 R86 13 R23			13 R21 18 R2 11 R13			27 R5 21 R15 29 R19			13 R5 11 R18 10 R36		
$928 \div 97$ 			$197 \div 28$ 			$343 \div 39$ 			$566 \div 36$ 		
7 R43 8 R63 9 R55			9 R12 7 R1 8 R5			8 R18 9 R29 8 R31			15 R26 16 R28 14 R31		

Winter Math

What's Included?





























4 No-Prep Worksheets:

- Color the Mittens
- Code Breaker
- Color by Number
- Find the Answer



Answer keys to make
your life easier!

[illegible]






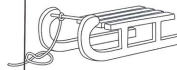






Name: _____ Long Division with 2 Digit Divisors Code Breaker Use the key on the right to find out what numbers to use in each problem, then solve.			
 ÷  $793 \div 41$ $= 19 R 14$	 ÷  $419 \div 18$ $= 23 R 5$	 ÷  $793 \div 23$ $= 34 R 11$	 274  41  793
 ÷  $274 \div 23$ $= 11 R 21$	 ÷  $153 \div 41$ $= 3 R 30$	 ÷  $283 \div 18$ $= 15 R 13$	 153  18  283
 ÷  $153 \div 23$ $= 6 R 15$	 ÷  $283 \div 23$ $= 12 R 7$	 ÷  $419 \div 41$ $= 10 R 9$	 419  23

Long Division with 2 Digit Divisors

Name: _____


Solve each problem. Using the key to the left, color each mitten based on your answer.

12 R8: Red					
5 R31: Blue					
13 R25: Green					
13 R1: Yellow					
8 R2: Purple					

<div> <div> <div>Name: _____</div> <div> <div>Long Division with 2 Digit Divisors</div> <div>Find the Answer</div> </div> </div> <div> <div>Solve each problem. Color or circle the correct answer below it.</div> <div>© Chika Campbell</div> </div> </div>											
$824 \div 84$ 			$321 \div 36$ 			 $218 \div 48$			 $701 \div 51$		
<input checked="" type="radio"/> R68	<input type="radio"/> I2 R2	<input type="radio"/> 8 RI2	<input type="radio"/> 9 RI5	<input type="radio"/> 4 RI31	<input checked="" type="radio"/> R33	<input type="radio"/> 5 R41	<input type="radio"/> 3 RI2	<input checked="" type="radio"/> R26	<input type="radio"/> I4 RI9	<input checked="" type="radio"/> R38	<input type="radio"/> I6 R25
 $959 \div 97$			 $372 \div 27$			 $540 \div 25$			 $416 \div 38$		
<input type="radio"/> 8 RI8	<input checked="" type="radio"/> R86	<input type="radio"/> I3 R23	<input checked="" type="radio"/> R21	<input type="radio"/> I8 RI2	<input type="radio"/> I1 RI3	<input type="radio"/> 27 R5	<input checked="" type="radio"/> R15	<input type="radio"/> 29 RI9	<input type="radio"/> I3 R5	<input type="radio"/> I1 RI8	<input checked="" type="radio"/> R36
 $928 \div 97$			 $197 \div 28$			 $343 \div 39$			 $566 \div 36$		
<input type="radio"/> 7R43	<input type="radio"/> 8 R63	<input checked="" type="radio"/> R55	<input type="radio"/> 9 RI2	<input checked="" type="radio"/> R1	<input type="radio"/> 8 R5	<input type="radio"/> 8 RI8	<input type="radio"/> 9 R29	<input checked="" type="radio"/> R31	<input checked="" type="radio"/> R26	<input type="radio"/> I6 R28	<input type="radio"/> I4 RI31

Activity #1

Color the Mittens



Students will solve each problem. Using the key, color each mitten based on the answer.

Name: _____

Long Division with 2 Digit Divisors


Solve each problem. Using the key to the left, color each mitten based on your answer.

Key	Mitten 1	Mitten 2	Mitten 3	Mitten 4	Mitten 5
12 R8: Red	$961 \div 72$	$186 \div 23$	$216 \div 37$	$236 \div 19$	
5 R31: Blue	$538 \div 67$				$126 \div 69$
13 R25: Green		$183 \div 14$	$380 \div 31$	$402 \div 29$	
13 R1: Yellow	$291 \div 52$	$519 \div 38$			$332 \div 27$
8 R2: Purple	$524 \div 43$	$371 \div 68$	$701 \div 52$	$362 \div 45$	$924 \div 71$

© Chloe Campbell

Activity #2

Code Breaker



















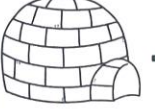







Use the key on the right to find out what numbers to use in each problem, then solve.

Name: _____

Long Division with 2 Digit Divisors Code Breaker

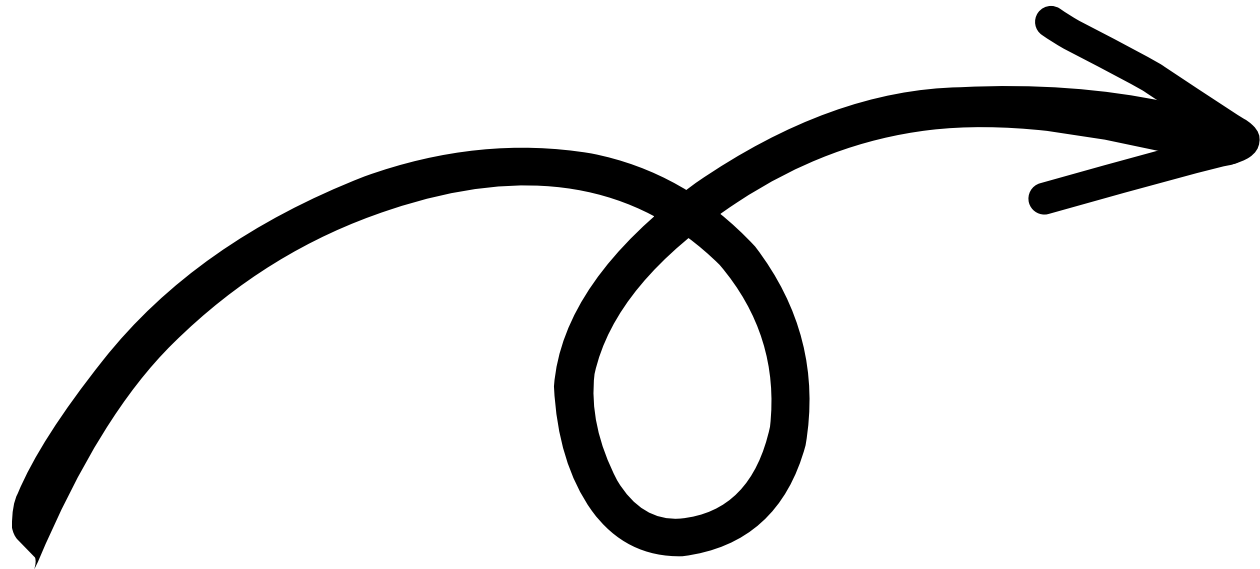
Use the key on the right to find out what numbers to use in each problem, then solve.

 ÷  $793 \div 41$ $= 19 R 14$	 ÷  $419 \div 18$ $= 23 R 5$	 ÷  $793 \div 23$ $= 34 R 11$	 274
 ÷  $274 \div 23$ $= 11 R 21$	 ÷  $153 \div 41$ $= 3 R 30$	 ÷  $283 \div 18$ $= 15 R 13$	 153
 ÷  $153 \div 23$ $= 6 R 15$	 ÷  $283 \div 23$ $= 12 R 7$	 ÷  $419 \div 41$ $= 10 R 9$	 18
			 283
			 419
			 23

© Chloe Campbell

Activity #3

Color by Number




Solve each problem. Then,
color the image based on
the key.

[illegible]

Activity #4

Find the Answer






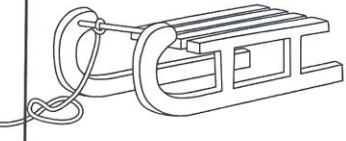








Solve each problem.
Color or circle the correct
answer below it.

Name: _____

Long Division with 2 Digit Divisors Find the Answer

Solve each problem. Color or circle the correct answer below it. © Chloe Campbell

$824 \div 84$ 	$321 \div 36$ 	$218 \div 48$ 	$701 \div 51$ 
<input checked="" type="radio"/> R68 12 R2 8 R12 9 R15 4 R31 <input checked="" type="radio"/> R33 5 R41 3 R12 <input checked="" type="radio"/> R26 14 R19 <input checked="" type="radio"/> R38 16 R25			
$959 \div 97$ 	$372 \div 27$ 	$540 \div 25$ 	$416 \div 38$ 
8 R18 <input checked="" type="radio"/> R86 13 R23 <input checked="" type="radio"/> R21 18 R2 11 R13 27 R5 <input checked="" type="radio"/> R15 29 R19 13 R5 11 R18 <input checked="" type="radio"/> R36			
$928 \div 97$ 	$197 \div 28$ 	$343 \div 39$ 	$566 \div 36$ 
7 R43 8 R63 <input checked="" type="radio"/> R55 9 R12 <input checked="" type="radio"/> R1 8 R5 8 R18 9 R29 <input checked="" type="radio"/> R31 <input checked="" type="radio"/> R26 16 R28 14 R31			

Suggestions for Use:

- Early Finishers
- Math Centers
- Independent Activity
- Sub Plans
- Small Groups
- Partner Activity
- Morning Work
- Winter Party

**NO PREP
FOR YOU!**

**Just print
and use!**