




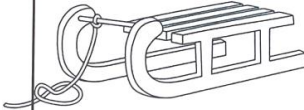








Name: _____											
Add and Subtract Decimals Find the Answer											
Solve each problem. Color or circle the correct answer below it.											
$6.39 - 2.25$ 			$3.85 + 3.64$ 			$8.85 - 4.12$ 			$6.37 + 3.58$ 		
<u>4.14</u>	4.34	3.44	6.49	<u>7.49</u>	8.49	<u>4.73</u>	4.65	5.51	8.29	9.15	<u>9.95</u>
$7.31 - 5.24$ 			$2.90 + 1.64$ 			$5.22 - 2.63$ 			$6.90 + 2.85$ 		
1.98	<u>2.07</u>	2.17	3.98	3.64	<u>4.54</u>	3.21	2.61	<u>2.59</u>	8.15	<u>4.75</u>	9.55
$7.36 - 4.78$ 			$3.01 + 2.95$ 			$9.82 - 0.99$ 			$4.42 + 5.32$ 		
<u>2.59</u>	3.29	3.49	<u>5.96</u>	5.26	5.93	9.81	<u>8.83</u>	8.55	8.53	9.83	<u>4.74</u>

Winter Math

What's Included?

★ 4 No-Prep Worksheets:

- Color the Mittens
- Code Breaker
- Color by Number
- Find the Answer

★ Answer keys to make your life easier!

Name: _____

Adding and Subtracting Decimals Color by Number

Solve each problem below. Then, color the image based on your answer.

Blue	$4.68 + 1.11$
White	$4.26 - 2.62$
Red	$2.74 + 5.47$
Yellow	$9.78 - 2.97$
Green	$3.9 + 3.89$
Brown	$8.05 - 5.18$

Name: _____

Add and Subtract Decimals Find the Answer

Solve each problem. Color or circle the correct answer below it.

$6.39 - 2.25$ 	$3.85 + 3.64$ 	$8.85 - 4.12$ 	$6.37 + 3.58$
<input checked="" type="radio"/> 4.14 4.34 3.44	<input checked="" type="radio"/> 6.49 <input checked="" type="radio"/> 7.49 8.49	<input checked="" type="radio"/> 4.73 4.65 5.51	<input checked="" type="radio"/> 8.29 9.15 <input checked="" type="radio"/> 9.95
$7.31 - 5.24$ 	$2.90 + 1.64$ 	$5.22 - 2.63$ 	$6.90 + 2.85$
<input checked="" type="radio"/> 1.98 <input checked="" type="radio"/> 2.07 2.17	<input checked="" type="radio"/> 3.98 3.64 <input checked="" type="radio"/> 4.54	<input checked="" type="radio"/> 3.21 2.61 <input checked="" type="radio"/> 2.59	<input checked="" type="radio"/> 8.15 <input checked="" type="radio"/> 4.75 9.55
$7.36 - 4.78$ 	$3.01 + 2.95$ 	$9.82 - 0.99$ 	$4.42 + 5.32$
<input checked="" type="radio"/> 2.59 3.29 3.49	<input checked="" type="radio"/> 5.96 5.26 5.93	<input checked="" type="radio"/> 9.81 <input checked="" type="radio"/> 8.83 8.55	<input checked="" type="radio"/> 8.53 9.83 <input checked="" type="radio"/> 4.74

Name: _____

Adding and Subtracting Decimals Code Breaker

Use the key on the right to find out what numbers to use in each problem, then solve.

+ $2.82 + 1.20 = 4.02$	- $5.75 - 1.20 = 4.55$	+ $9.16 + 4.19 = 13.35$	5.75
- $6.96 - 2.82 = 4.14$	+ $1.45 + 1.45 = 2.90$	- $4.19 - 1.45 = 2.74$	1.20
+ $9.16 + 6.96 = 16.12$	- $5.75 - 3.38 = 2.37$	+ $6.96 + 3.38 = 10.34$	6.96
			1.45
			2.82
			3.38
			4.19

Name: _____


Add and Subtract Decimals

Solve each problem. Using the key to the left, color each mitten based on your answer.

7.57: Red	9.81	1.70	9.81	1.59	5.27	7.38
9.58: Blue	9.81	- 0.23	9.81	0.37	2.30	+ 2.23
1.96: Green	3.81	+ 5.87	3.81	+ 0.37	2.30	
2.24: Yellow	-1.85	3.47	8.44	6.04	8.79	2.31
5.29: Purple	3.47	+ 6.11	0.87	- 0.74	- 6.55	+ 2.98
	3.96	- 1.85	2.31	4.60	4.56	9.20
	+ 3.61	- 1.85	2.98	+ 4.98	- 2.60	- 1.63

Activity #1

Color the Mittens



Students will solve each problem. Using the key, color each mitten based on the answer.

Name: _____

Add and Subtract Decimals

Solve each problem. Using the key to the left, color each mitten based on your answer.


7.57: Red
9.58: Blue
1.96: Green
2.24: Yellow
5.29: Purple

$1.70 + 5.87$	$9.81 - 0.23$	$1.59 + 0.37$	$5.27 + 2.30$	$7.35 + 2.23$
$3.81 - 1.85$	$3.47 + 6.11$	$8.44 - 0.87$	$6.04 - 0.75$	$8.79 - 6.55$
$3.96 + 3.61$	$4.09 - 1.85$	$2.31 + 2.98$	$4.60 + 4.98$	$4.56 - 2.60$
				$9.20 - 1.63$



























© Chloe Campbell

Activity #2

Code Breaker




Use the key on the right to find out what numbers to use in each problem, then solve.

Name: Adding and Subtracting Decimals Code Breaker				
Use the key on the right to find out what numbers to use in each problem, then solve.				
 +  $2.82 + 1.20$ $= 4.02$	 -  $5.75 - 1.20$ $= 4.55$	 +  $9.16 + 4.19$ $= 13.35$	 5.75	
			 1.20	
			 9.16	
 -  $6.96 - 2.82$ $= 4.14$	 +  $1.45 + 1.45$ $= 2.90$	 -  $4.19 - 1.45$ $= 2.74$	 6.96	
			 1.45	
			 2.82	
 +  $9.16 + 6.96$ $= 16.12$	 -  $5.75 - 3.38$ $= 2.37$	 +  $6.96 + 3.38$ $= 10.34$	 3.38	
			 4.19	

Activity #3

Color by Number




Solve each problem. Then,
color the image based on
the key.

[illegible]






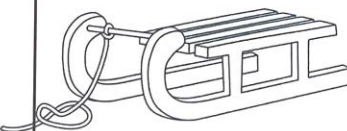






Activity #4

Find the Answer



Solve each problem.

Color or circle the correct answer below it.

Name: _____				Add and Subtract Decimals Find the Answer											
Solve each problem. Color or circle the correct answer below it.															
$6.39 - 2.25$ 	$3.85 + 3.64$ 	 $8.85 - 4.12$	 $6.37 + 3.58$	<input checked="" type="radio"/> 4.14	<input type="radio"/> 4.34	<input type="radio"/> 3.44	<input type="radio"/> 6.49	<input checked="" type="radio"/> 7.49	<input type="radio"/> 8.49	<input checked="" type="radio"/> 4.73	<input type="radio"/> 4.65	<input type="radio"/> 5.51	<input type="radio"/> 8.29	<input type="radio"/> 9.15	<input checked="" type="radio"/> 9.95
$7.31 - 5.24$ 	$2.90 + 1.64$ 	$5.22 - 2.63$ 	$6.90 + 2.85$ 	<input type="radio"/> 1.98	<input checked="" type="radio"/> 2.07	<input type="radio"/> 2.17	<input type="radio"/> 3.98	<input type="radio"/> 3.64	<input checked="" type="radio"/> 4.54	<input type="radio"/> 3.21	<input type="radio"/> 2.61	<input checked="" type="radio"/> 2.54	<input type="radio"/> 8.15	<input checked="" type="radio"/> 9.75	<input type="radio"/> 9.55
$7.36 - 4.78$ 	$3.01 + 2.95$ 	$9.82 - 0.99$ 	 $4.42 + 5.32$	<input checked="" type="radio"/> 2.59	<input type="radio"/> 3.29	<input type="radio"/> 3.49	<input checked="" type="radio"/> 5.96	<input type="radio"/> 5.26	<input type="radio"/> 5.93	<input type="radio"/> 9.81	<input checked="" type="radio"/> 8.83	<input type="radio"/> 8.55	<input type="radio"/> 8.53	<input type="radio"/> 9.83	<input checked="" type="radio"/> 4.74

Suggestions for Use:

- Early Finishers
- Math Centers
- Independent Activity
- Sub Plans
- Small Groups
- Partner Activity
- Morning Work
- Winter Party

**NO PREP
FOR YOU!**

**Just print
and use!**