
















Name: _____


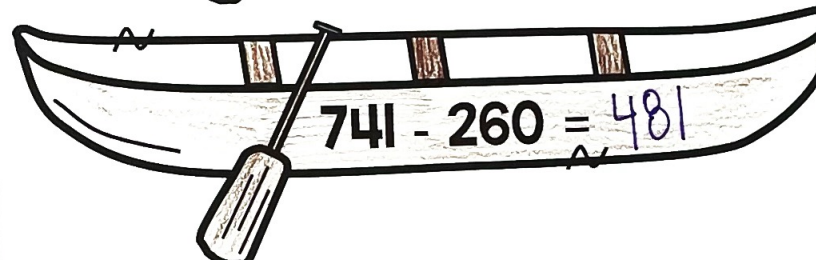


Addition & Subtraction Within 1,000

Solve the problems below. Color the fish whose answer matches the answer in the fishbowl at the top of the column.














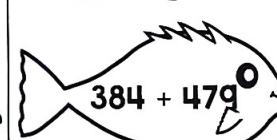

Name: _____

Subtraction Within 1,000

Addition & Subtraction Within 1,000

Solve the problems below. Color the fish whose answer matches the answer in the fishbowl at the top of the column.






Draw a Number: Subtract Within 1,000

Directions: Draw one surfboard number and write the number in the first box. Draw one sunshine number and write the number in the second box. Find the difference between the two numbers.

Number #1	Number #2	Difference
814	351	463
84	384	300

Subtraction Within 1,000

Directions: Cut out the bees at the bottom. Solve the subtraction problems. Match the bees with the hives.

Add & Subtract within 1,000

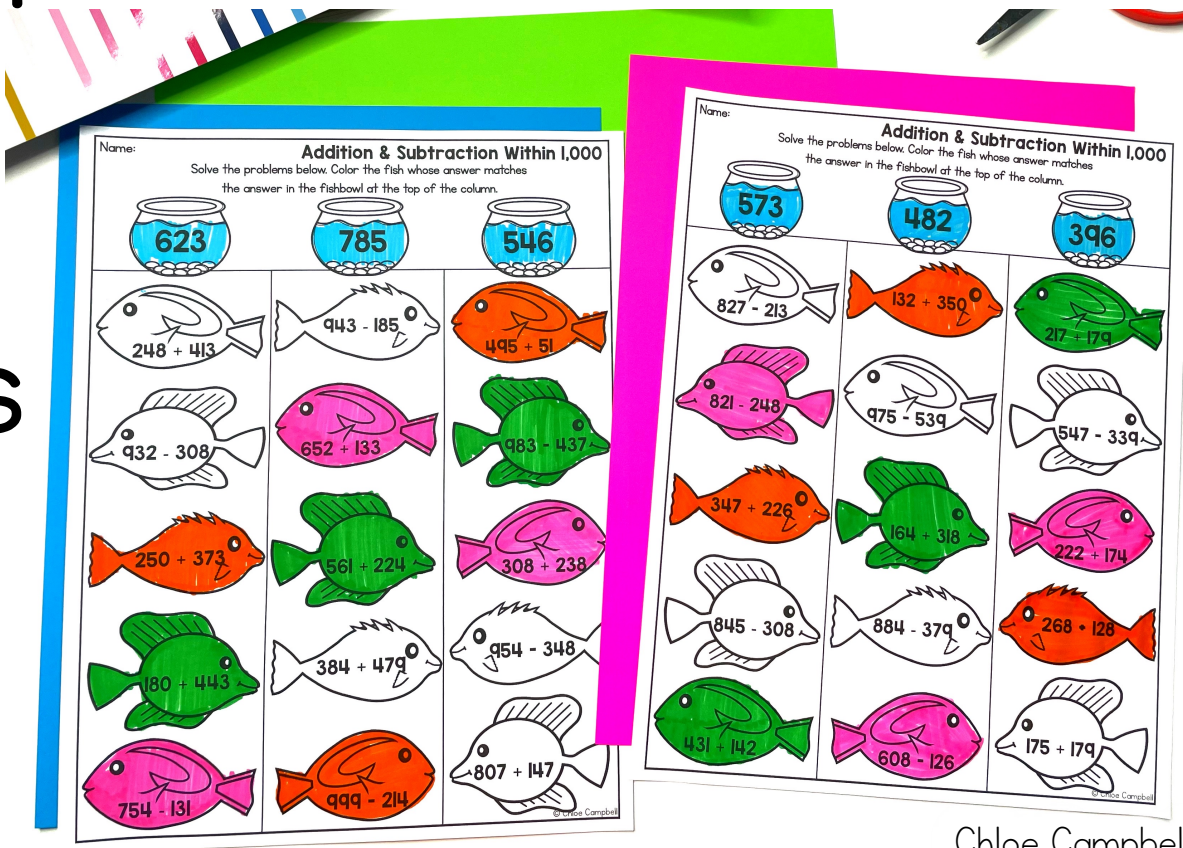
What's included?


- ✓ Booklet for whole group or small group instruction
- ✓ 4 low-prep, hands-on activities for stations or independent work
- ✓ Teacher Directions
- ✓ Answer Keys



5 Attention Grabbing Activities

- ✓ Add & Subtract Booklet
- ✓ Beehives Addition & Subtraction
- ✓ Canoe Addition & Subtraction
- ✓ Fish Addition & Subtraction
- ✓ Surfboards & Sunshine Cards





Problem	Answer
595 + 128	723
966 - 248	718
755 - 496	259
125 + 231	356
457 + 339	796
822 - 479	343

Addition & Subtraction Within 1,000

By:



Draw Base Ten Blocks

Addition:

1. Draw or build the first number with the base ten blocks.
2. Draw or build the second number with base ten blocks.
3. Count them altogether to find the sum.

Subtraction:

1. Draw or build the first number with the base ten blocks.
2. Take away the smaller number.
3. Count what is left to find the difference.

654 + 126

Draw Base Ten Blocks

Expanded Form
$$\begin{array}{r} 600 + 50 + 4 \\ + 100 + 20 + 6 \\ \hline 700 + 70 + 10 \\ 780 \end{array}$$

Standard Model
$$\begin{array}{r} 654 \\ + 126 \\ \hline 780 \end{array}$$

748 - 532

Draw Base Ten Blocks

Expanded Form
$$\begin{array}{r} 700 + 40 + 8 \\ - 500 + 30 + 2 \\ \hline 200 + 10 + 6 \\ 216 \end{array}$$

Standard Model
$$\begin{array}{r} 748 \\ - 532 \\ \hline 216 \end{array}$$

Add & Subtract within 1,000 Booklet



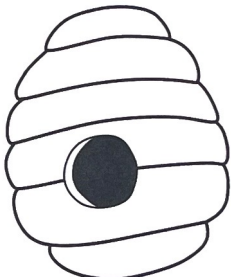





Beehive Addition & Subtraction



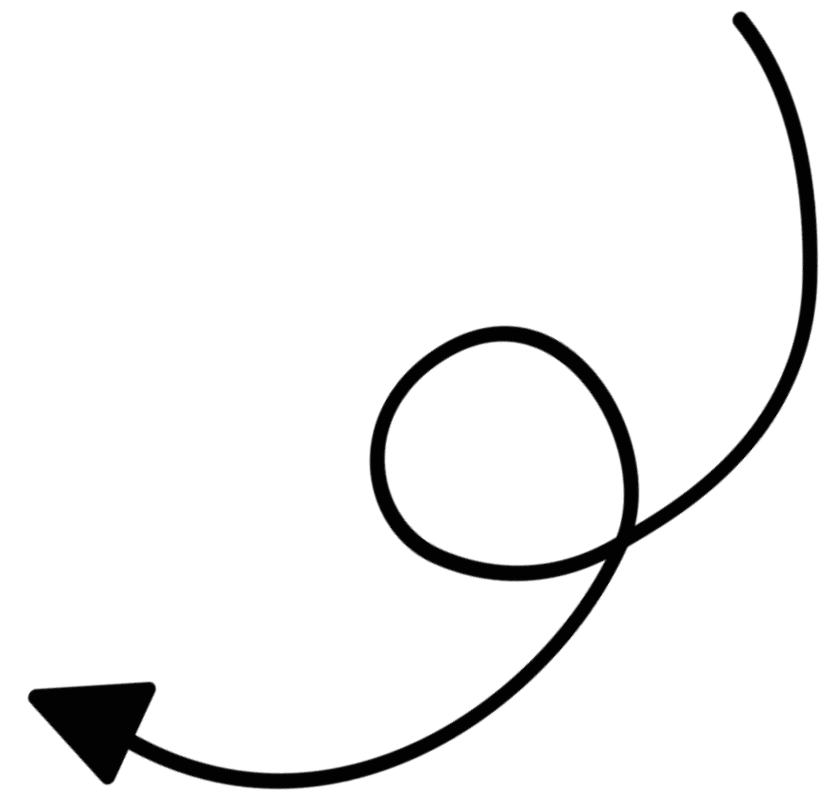
Name: _____

Directions: Cut out the bees at the bottom of the page. Solve the addition problems. Match the bees with the hives.

Addition Up to 1,000

 $264 + 156$	 $426 + 347$	 $293 + 512$	 $105 + 746$
 $845 + 125$	 $754 + 134$	 $496 + 387$	 $654 + 142$

© Chloe Campbell



Subtraction Within 1,000

Name: _____



$$684 - 292 = 392$$


$$741 - 260 = 481$$



$$999 - 175 = 824$$



$$818 - 716 = 102$$


© Chloe Campbell


Addition Within 1,000

Name: _____



$$642 + 253 = 895$$


$$458 + 183 = 641$$



$$591 + 342 = 933$$


$$433 + 391 = 824$$

© Chloe Campbell
















Canoe Addition & Subtraction

Fish Addition & Subtraction



Addition & Subtraction Within 1,000

Solve the problems below. Color the fish whose answer matches the answer in the fishbowl at the top of the column.
















Fishbowl: 623	Fishbowl: 785	Fishbowl: 546
 $248 + 413$	 $943 - 185$	 $495 + 51$
 $932 - 308$	 $652 + 133$	 $983 - 437$
 $250 + 373$	 $561 + 224$	 $308 + 238$
 $180 + 443$	 $384 + 479$	 $954 - 348$
 $754 - 131$	 $999 - 214$	 $807 + 147$

© Chloe Campbell

Name: _____

Addition & Subtraction Within 1,000

Solve the problems below. Color the fish whose answer matches the answer in the fishbowl at the top of the column.

Fishbowl: 573	Fishbowl: 482	Fishbowl: 396
 $827 - 213$	 $132 + 350$	 $217 + 179$
 $821 - 248$	 $975 - 539$	 $547 - 339$
 $347 + 226$	 $164 + 318$	 $222 + 174$
 $845 - 308$	 $884 - 379$	 $268 + 128$
 $431 + 142$	 $608 - 126$	 $175 + 179$

© Chloe Campbell



Name: _____

Draw a Number: Subtract Within 1,000

Directions: Draw one surfboard number and write the number in the first box.
Draw one sunshine number and write the number in the second box. Find the difference between the two numbers..

Number #1		Number #2		Difference
814	-	351	=	463
684	-	384	=	300
999	-	426	=	573
934	-	222	=	712

Draw a Number

Perfect For:

- ✓ Centers or Stations
- ✓ Morning Work
- ✓ Activities
- ✓ Introducing Skills
- ✓ Assessments or Quick Checks
- ✓ Reteaching Skills
- ✓ Summer School Lessons
- ✓ Homework or Family Based Activities
- ✓ Intervention Lessons

Name: _____

Addition & Subtraction Within 1,000

Solve the problems below. Color the fish whose answer matches the answer in the fishbowl at the top of the column.

Fishbowl	Fish Problems
573	$827 - 213$ $821 - 248$ $347 + 226$ $845 - 308$
482	$132 + 350$ $975 - 539$ $164 + 318$ $884 - 379$
396	$217 + 179$ $547 - 339$ $222 + 174$ $268 + 128$

Name: _____

Subtraction Within 1,000

Solve the problems below. Color the fish whose answer matches the answer in the fishbowl at the top of the column.

Fishbowl	Fish Problems
623	$48 + 413$ $32 - 308$ $250 + 373$ $180 + 443$
785	$943 - 185$ $652 + 133$ $561 + 224$ $384 + 479$
546	$495 + 51$ $983 - 437$ $308 + 238$ $954 - 348$

Name: _____

Subtraction Within 1,000

Solve the problems below. Color the fish whose answer matches the answer in the fishbowl at the top of the column.

Fishbowl	Fish Problems
623	$48 + 413$ $32 - 308$ $250 + 373$ $180 + 443$
785	$943 - 185$ $652 + 133$ $561 + 224$ $384 + 479$
546	$495 + 51$ $983 - 437$ $308 + 238$ $954 - 348$

Name: _____

Draw a Number: Subtract Within 1,000

Directions: Draw one surfboard number and write the number in the first box. Draw one sunshine number and write the number in the second box. Find the difference.

Name: _____

Subtraction Within 1,000

Directions: Cut out the bees at the bottom. Solve the subtraction problems. Match the bees with the hives.

Grab these low-prep activities and watch your students' engagement and achievement increase!

Ten More and Ten Less
 Directions: Write the number that is ten more in the top ice cream scoop. Write the number that is ten less in the bottom ice cream scoop.

Build a Sandcastle
 Directions: Look at the number at the top of the sandcastle. Inside each level of the sandcastle, write the number that is ten less, ten more, one hundred less, and one hundred more.

Hundred More and Hundred Less
 Directions: Write the number that is one hundred more in the top ice cream scoop. Write the number that is one hundred less in the bottom ice cream scoop.

Add Two-Digit Whole Numbers
 Directions: Roll a die two times to create a 2-digit number. Write that number in the first box. Add the two numbers to find the sum and write the answer in the third box.

Roll a Number: Add up to 100
 Directions: Roll a die three times to create a 3-digit number. Write that number in the original number box. Then write the number that is ten more and ten less.

Draw a Number: Add Up to 100
 Directions: Draw two numbers from the flashlights and camping tents. Write the first number in the first box and the second number in the second box. Add the two numbers together and write the sum in the last box.

Click here to upgrade to the ENTIRE bundle!